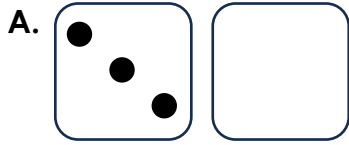
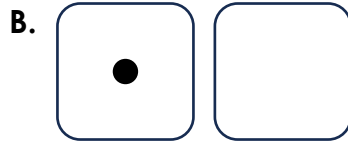


# Doubles


1. Below are all the doubles that can be rolled with two dice. Complete the spots and the totals.




Double 3 is  .



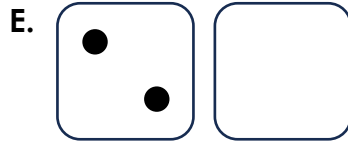
Double 1 is  .




Double 6 is  .



Double 4 is  .



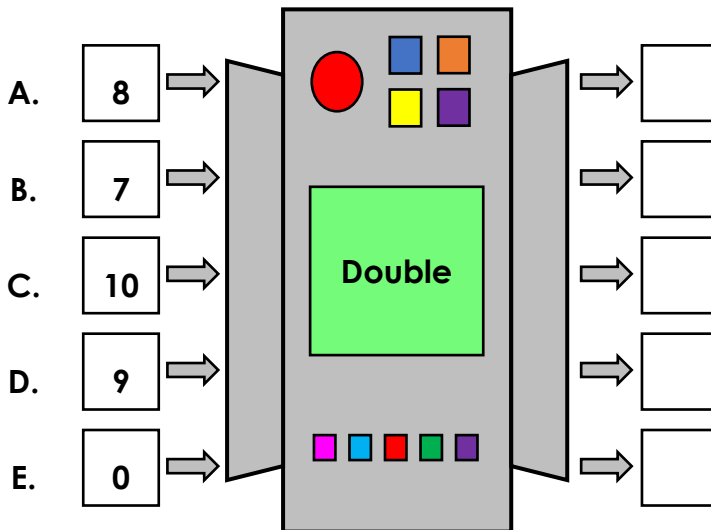
Double 2 is  .



Double 5 is  .


VF

2. Complete the function machine.



VF


3. A bird lays 1 egg on Monday. Every day after that, she lays double the number of eggs she laid the day before.



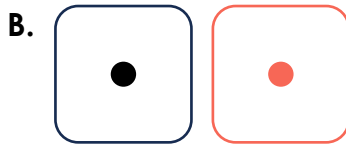
On which day does she lay 16 eggs? Explain your answer.

RPS


## Doubles




Double 3 is 6 .



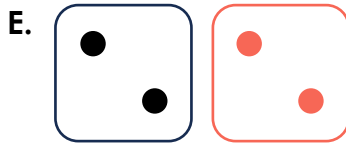
Double 1 is 2 .




Double 6 is 12 .



Double 4 is 8 .



Double 2 is 4 .



Double 5 is 10 .

2. A. 16; B. 14; C. 20; D. 18; E. 0

3. The bird laid 1 egg on Monday and 2 eggs on Tuesday. She will lay 4 eggs on Wednesday, 8 eggs on Thursday, so she will lay 16 eggs on Friday.