


Name: _____ Date: _____

1 This is the whole.




Tick the parts.

2 Complete the sentence.



is a part.

3 Complete the sentences.

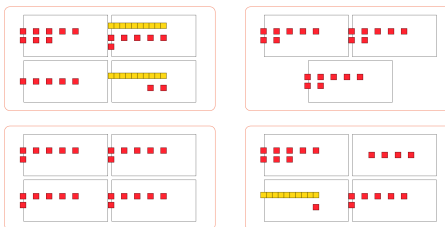


The whole is

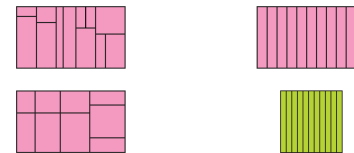
is a part.

is another part.

4 Tick the pictures that show equal groups.



5 Circle the shapes that have been split into equal parts.



6 Complete the sentences.




There are equal groups.

Each group has muffins.

7 Circle the diagram that shows a half.



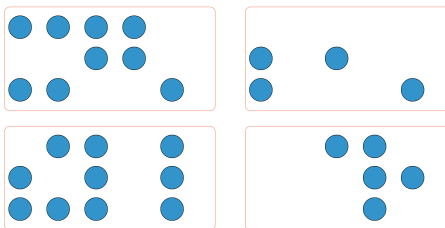
8 Circle the pictures that have a half shaded.



9 Shade half of the circles.



10 Tick the sets of counters that can be shared into 2 equal groups.



11 Find $\frac{1}{2}$ of 6



$\frac{1}{2}$ of 6 is

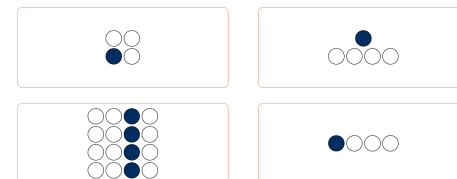
12 Work out the missing number.

$\frac{1}{2}$ of 16 =

13 Circle the diagram that shows a quarter.



14 Circle the pictures that have a quarter shaded.



15 Shade a quarter of the grid.

