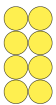


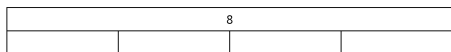
Name: _____ Date: _____

1 Find $\frac{1}{4}$ of 8



$\frac{1}{4}$ of 8 is

2 Find $\frac{1}{4}$ of 8



$\frac{1}{4}$ of 8 is

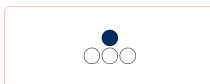
3 Fill in the missing number.

$\frac{1}{4}$ of 16 is

4 Circle the diagrams that show a third.



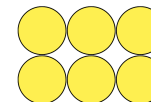
5 Circle the pictures that have a third shaded.



6 Shade a third of the grid.




7 Find $\frac{1}{3}$ of 6



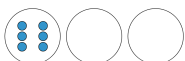
$\frac{1}{3}$ of 6 is

8 What is $\frac{1}{3}$ of 15?

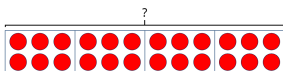


$\frac{1}{3}$ of 15 is

9 One third of a number is 6
What is the number?



10 Work out the missing number.



$\frac{1}{4}$ of is 6

11 Work out the missing number.
Use the bar model to help.



$\frac{1}{2}$ of is 3

12 Work out the missing number.

$\frac{1}{4}$ of is 1

13 Tick the shape that has 1 equal part shaded.



14 Tick the unit fraction that matches the picture.



$\frac{1}{2}$

$\frac{1}{3}$

$\frac{1}{4}$

$\frac{1}{5}$

15 Tick the unit fractions.

$\frac{3}{1}$

$\frac{1}{2}$

$\frac{2}{5}$

$\frac{1}{3}$