

Name: _____

Date: _____

1 Tick the time shown.



8 o'clock

half past 8

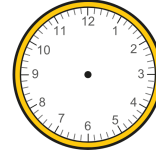
7 o'clock

2 What time does the clock show?



o'clock

3 Draw hands on the clock to show half past 12



4 Tick the time shown.



half past 4

quarter past 4

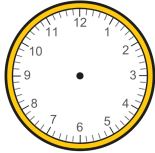
quarter past 5

5 What time does the clock show?



quarter past

6 Draw hands on the clock to show quarter to 3



7 Tick the time shown.




5 minutes past 11

25 minutes past 11

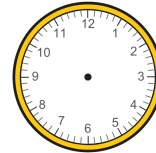
5 minutes to 5

8 What time does the clock show?




minutes past

9 Draw hands on the clock to show quarter past 6



10 Tick the time shown.



quarter to 4

9 minutes past 3

quarter to 3

11 What time does the clock show?



minutes to

12 Draw hands on the clock to show 10 minutes to 9

