

Name: _____

Date: _____

1 Match the times to the clocks.





25 minutes past 5

5 minutes to 5

5 minutes past 5

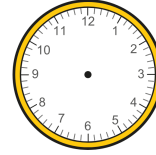
25 minutes to 5

2 What time does the clock show?




minutes past

3 Draw hands on the clock to show quarter to 8



4 How many minutes are there in a quarter of an hour?



minutes

5 Complete the sentence.

85 minutes = hour and minutes

6 Write <, > or = to compare.

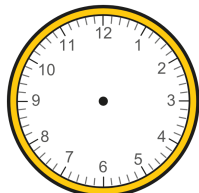
60 minutes 1 hour and 5 minutes

7 Use the cards to complete the sentence.

Midnight Noon

is 12 o'clock in the middle of the day.

8 The time is 8 o'clock.
Draw hands on the clock to show what time it will be in 3 hours.



9 The time is 8 o'clock.
How many hours will it be until the hour hand is pointing at the 8 again?



hours

10 The numbers are all in the 5 times-table.
Tick the numbers that are also in the 10 times-table.

35	45
100	25
65	40

11 Sort the numbers into the table.

75 70 85 55 40 60

Only in the 5 times-table	In both the 5 and 10 times-tables	Only in the 10 times-table

12 Complete the calculations.

$$\square = 10 \times 5$$

$$\square = 5 \times 10$$