

Name: \_\_\_\_\_

Date: \_\_\_\_\_

1 Tick how many children have 0 pets.

● = 1 child

Number of pets	Number of children
0	●●●●●●●
1	●●●
2	●
3	●●●●●

1

3

5

6

2 Tick the day on which the **fewest** drinks were sold.

● = 1 drink

Day	Number of drinks sold
Monday	
Wednesday	●●
Thursday	●●●●●
Sunday	●

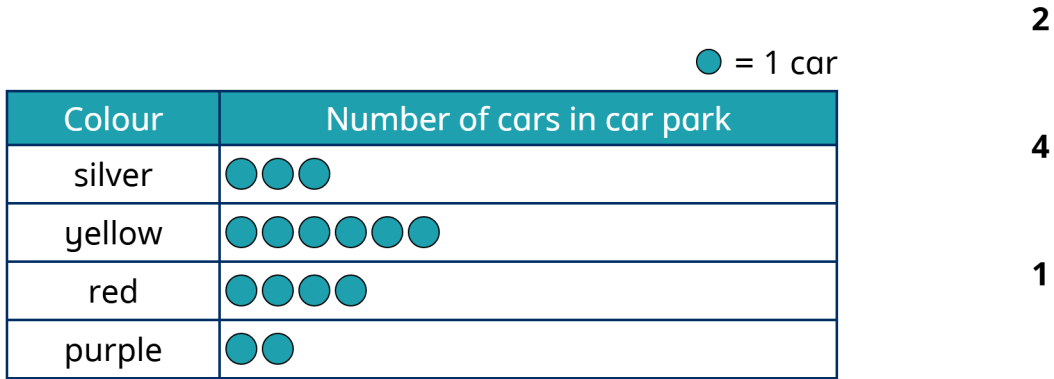
Monday

Wednesday

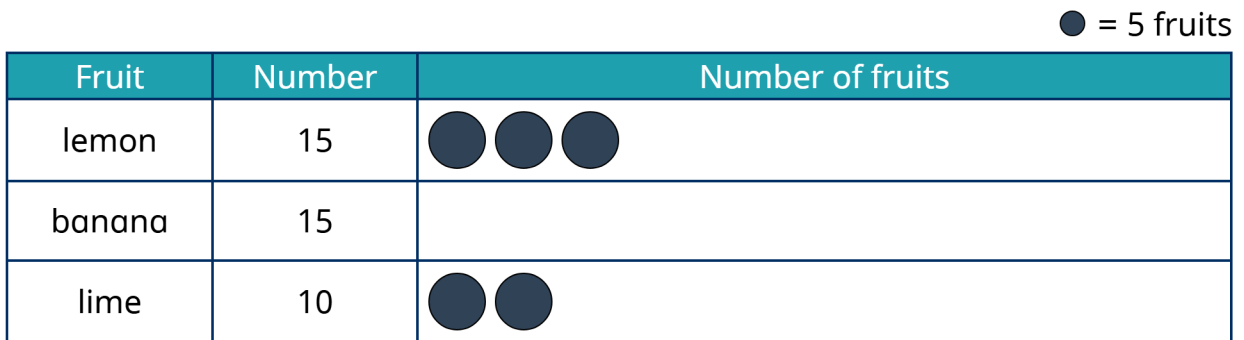
Thursday

Sunday

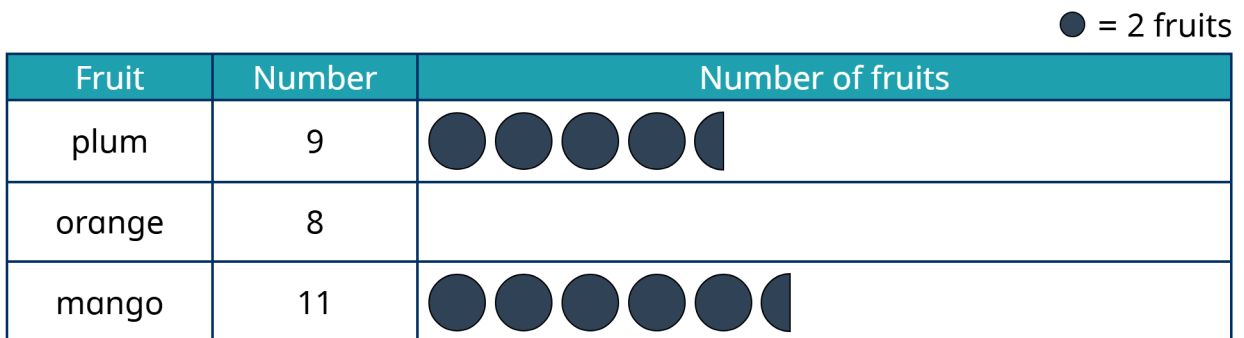
3 Tick how many **fewer** cars are silver than red.



4 Complete the pictogram.



5 Complete the pictogram.



6 Complete the pictogram.

● = 5 fruits

Fruit	Number	Number of fruits
plum	25	
banana	20	
orange	30	● ● ● ● ● ●

7 Tick the day on which the **fewest** muffins were sold.

● = 10 muffins

Day	Number of muffins sold
Monday	●
Tuesday	● ● ● ●
Saturday	● ●
Sunday	● ● ● ● ● ●

Monday

Saturday

Sunday

Tuesday

8 Tick how many children have 3 pets.

● = 2 children

Number of pets	Number of children
0	● ● ● ● ● ●
1	●
2	● ● ● ● ●
3	● ● ●

2

6

9

11

9 Tick how many **fewer** cars are purple than green.

● = 2 cars

Colour	Number of cars in car park
orange	● ● ●
black	● ● ● ● ● ●
purple	● ● ● ●
green	● ● ● ● ●

6

12

10

2

10 Draw coins to make 100p.



11 Circle the coins to make £1



12 Work out the missing value.

$$60p + \boxed{\phantom{00}} p + 30p = 100p$$