

Name: _____ Date: _____

1 Use the cards to complete the sentence.



square circle triangle

The circle is between the and the .

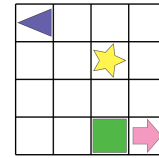
2 Use the cards to complete the sentence.



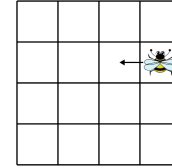
arrow rectangle triangle

The star is between the and the .

3 Draw a circle to the **right** the triangle.




4 Use the cards to complete the sentence.




left forwards right backwards

The bee is moving 1 space .

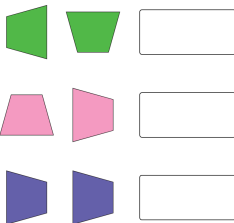
5 The ant moves 1 space **down**.
Draw a cross to show where the ant is now.



6 The bee moves 1 space **down** and 1 space **left**.
Draw a cross to show where the bee is now.



7 Match the shapes to the turn.



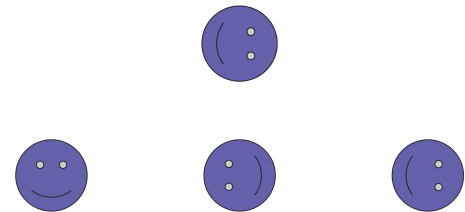
three-quarter turn anticlockwise

half turn

full turn

quarter turn anticlockwise

8 Tick what the shape will look like after a **three-quarter** turn clockwise.



9 Use the cards to complete the sentence.



half quarter full three-quarter

The shape has turned a turn clockwise.

