

- 1 The picture shows a multiplication.
Use the cards to complete the multiplication.



50 10 9 15

$5 \times 10 = 50$


- 2 Complete the number track.



- 3 Complete the multiplication.

$55 = 11 \times 5$

- 4 Complete the calculations to match the array.



$2 \times 5 = 10$

$10 \div 5 = 2$

Accept any order.

- 5 Use the cards to complete the calculations.

45 14 50 9

$5 \times 9 = 45$

$45 \div 5 = 9$

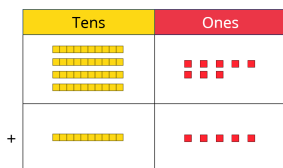
- 6 Complete the division.

$5 \div 5 = 1$

- 7 What is $16 + 25$?
Tick the correct answer.


31	311
41	51

- 8 Complete the addition.

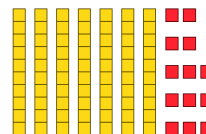


$48 + 15 = 63$

- 9 Complete the bar model.



- 10 Complete the subtraction.



$83 - 48 = 35$

- 11 What is $27 - 19$?
Tick the correct answer.

9	8
7	18

12 Complete the bar model.

