

# Maths Activity Mat

3

## Section 1

Which number is the odd one out and why?

24    15    26    32

.....  
.....

## Section 2

Put these amounts of money in order from smallest to largest.

56p    35p    65p    53p    23p

<input type="text"/>	<input type="text"/>	<input type="text"/>	<input type="text"/>	<input type="text"/>
----------------------	----------------------	----------------------	----------------------	----------------------

smallest largest

## Section 3

Fill in the missing numbers:

$2 \times \square = 18$

$80 \div \square = 8$

$\square \times 10 = 30$

$36 = 9 \times \square$

## Section 4

How much will it cost to buy six ice creams?



**Ice Cream Cones**  
30p Each

## Section 5

A rectangular dining room measures 4m and 6m. What is the perimeter of the room?



## Section 6


Use Roman numerals to write the numbers:

$12 = \square$

$30 = \square$

## Section 7

If there are five zebras in a zoo, how many legs are there altogether?



## Section 8

Ben's cat eats two pouches of cat food each day. He buys a box holding 40 pouches. How many days will this last?

# Maths Activity Mat: 3

## Answers

### Section 1

Which number is the odd one out and why?

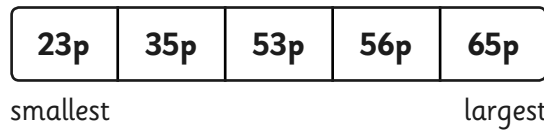
24    15    26    32

**15 because it is odd. (or any other sensible answer relating to the properties of the given numbers.)**

### Section 2

Put these amounts of money in order from smallest to largest.

56p    35p    65p    53p    23p



### Section 3

Fill in the missing numbers:

$$2 \times \boxed{9} = 18 \qquad 80 \div \boxed{10} = 8$$

$$\boxed{3} \times 10 = 30 \qquad 36 = 9 \times \boxed{4}$$

### Section 4

How much will it cost to buy six ice creams?

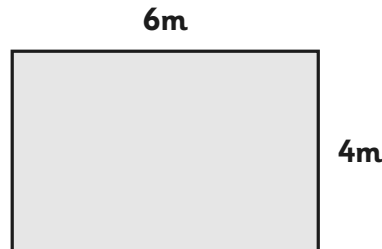


**Ice Cream Cones**  
30p Each

**£1.80 or 180p**

### Section 5

A rectangular dining room measures 4m and 6m. What is the perimeter of the room?



**20m**

### Section 6

Use Roman numerals to write the numbers:

$$12 = \boxed{\text{XII}}$$

$$30 = \boxed{\text{XXX}}$$

### Section 7

If there are five zebras in a zoo, how many legs are there altogether?



**20**

### Section 8

Ben's cat eats two pouches of cat food each day. He buys a box holding 40 pouches. How many days will this last?

**20 days**