

Year 3 Maths Activity Mat

③

Section 1

Order these fractions from smallest to largest:

$$\frac{5}{11} \quad \frac{2}{11} \quad \frac{9}{11} \quad \frac{6}{11}$$

--	--	--	--

Order these numbers from largest to smallest:

2100 1500 1330 2200

--	--	--	--

Section 2

Draw a pair of parallel lines:

What is $\frac{1}{2}$ of 202?

--

Section 3

How many right angles does a rectangle have?

--

Write two more fact about rectangles:

Section 4


Cassie has 32 flowers and 4 vases.

If she shares them equally, how many flowers will be in each vase?

--

Section 5

How many minutes are there in 2 and a half hours?



--

Section 6

6 eggs fill one box.

If I have 40 eggs, how many boxes will I need?



--


Section 7

An entrance ticket for a theme park costs £22 and I can go on as many rides as I like.

Or each ride costs £3.90. If I want to go on 4 rides, is it cheaper to pay for each ride or buy the entrance ticket?

Section 8

How many faces does this 3D shape have?



--

Year 3 Maths Activity Mat: 3

Answers

Section 1

Order these fractions from smallest to largest:

$$\frac{5}{11} \quad \frac{2}{11} \quad \frac{9}{11} \quad \frac{6}{11}$$

$\frac{2}{11}$	$\frac{5}{11}$	$\frac{6}{11}$	$\frac{9}{11}$
----------------	----------------	----------------	----------------

Order these numbers from largest to smallest:

2100 1500 1330 2200

2200	2100	1500	1330
------	------	------	------

Section 2

Draw a pair of parallel lines:



What is $\frac{1}{2}$ of 202?

101

Section 3

How many right angles does a rectangle have?

4

Write two more facts about rectangles:

Accept any reasonable answer.

Section 4


Cassie has 32 flowers and 4 vases.

If she shares them equally, how many flowers will be in each vase?

8

Section 5

How many minutes are there in 2 and a half hours?



150 minutes

Section 6

6 eggs fill one box.

If I have 40 eggs, how many boxes will I need?



7

Section 7


An entrance ticket for a theme park costs £22 and I can go on as many rides as I like.

Or each ride costs £3.90. If I want to go on 4 rides, is it cheaper to pay for each ride or buy the entrance ticket?

Pay for rides.

Section 8

How many faces does this 3D shape have?



7