

Homework

Tell the Time to the Hour

National Curriculum Objectives:

Mathematics Year 1: (1M4a) Tell the time to the hour and half past the hour and draw the hands on a clock face to show these times

Differentiation:

Questions 1, 4 and 7 (Varied Fluency)

Developing Complete time sentences to match clocks using a word bank including numbers only.

Expected Complete time sentences to match clocks using a word bank including numbers and words.

Greater Depth Complete time sentences to match clocks with missing digits including numbers and words.

Questions 2, 5 and 8 (Varied Fluency)

Developing Decide if a clock is showing the correct time. Using numbers only.

Expected Decide if a clock is showing the correct time. Using numbers and words.

Greater Depth Decide if a clock is showing the correct time on clocks with missing digits. Using numbers and words.

Questions 3, 6 and 9 (Reasoning and Problem Solving)





Developing Use clues to match times on clock faces, using numbers only.

Expected Use clues to match times on clock faces, using numbers and words.

Greater Depth Use clues to match times on clock faces with missing digits, using numbers and words.

Tell the Time to the Hour

1. Use the words and numbers in the word bank to complete the sentences to match the clocks.



___ o'clock

The ___
is at 2.

___ o'clock

The ___
is at 12.

5 ___

minute
hand

8

hour hand

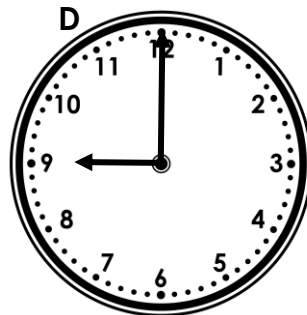
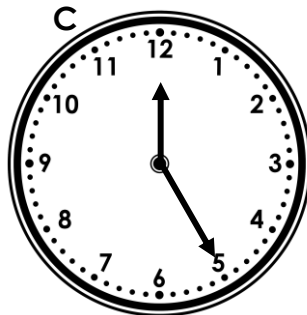


7

o'clock



VF
HW/Ext

2. Tick the clocks which are showing the correct time.



7 o'clock

11 o'clock

5 o'clock

9 o'clock



VF
HW/Ext

3. Use the clues to match the clocks to the children.



My time has an even number less than 10.

My time has both hands pointing to the same number on the clock.



Gareth

Helen


My time is between 2 and 8 o'clock.



Atifa



Clock
A



Clock
B







Clock
C



RPS
HW/Ext

Tell the Time to the Hour

4. Use the words and numbers in the word bank to complete the sentences to match the clocks.



___ o'clock

The ___
is at 12.

___ o'clock

The ___
is at 11.

Two ___

minute
hand

7

five

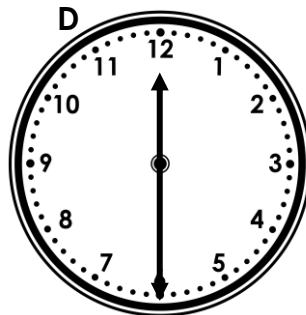
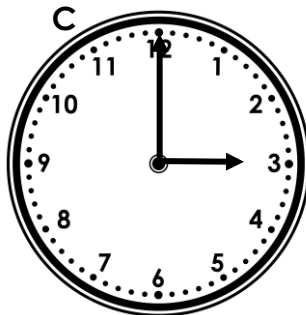

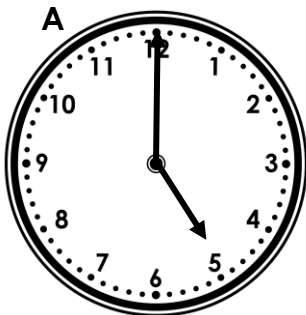
o'clock

hour hand



VF
HW/Ext

5. Tick the clocks which are showing the correct time.



four o'clock

10 o'clock

three o'clock

6 o'clock



VF
HW/Ext

6. Use the clues to match the clocks to the children.



Nathan

My time has an odd number more than six.

My time is between one and five o'clock.




Diana


One hand points to half the number the other hand points to.




Cerys



Clock
A



Clock
B








Clock
C



RPS
HW/Ext

Tell the Time to the Hour

7. Complete the sentences to match the clocks, using words not numbers.



____ o'clock

The _____
is at twelve.

____ o'clock

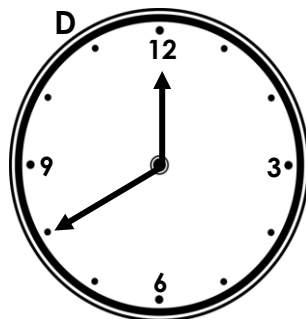
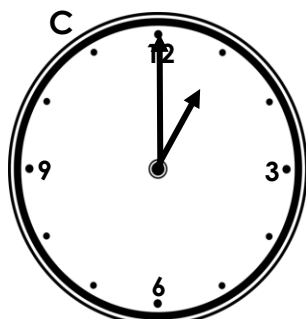
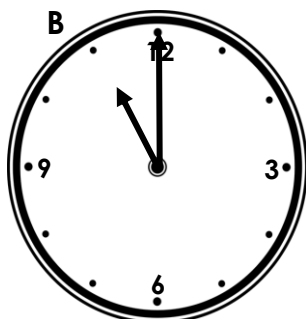
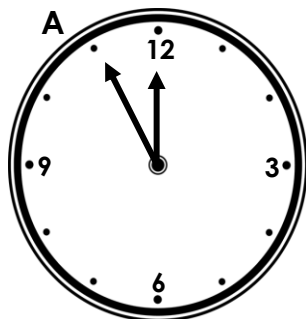
The _____
is at four.

Six _____



VF
HW/Ext

8. Tick the clocks which are showing the correct time.



eleven
o'clock

11 o'clock

1 o'clock

eight o'clock



VF
HW/Ext

9. Use the clues to match the clocks to the children.



Alex

My time is later than 5 o'clock.

My time is an odd number
between three and 7 o'clock.



Grayson


My time has both hands opposite
each other on the clock.




Izzy



Clock
A



Clock
B



Clock
C



RPS
HW/Ext

Homework

Tell the Time to the Hour

Developing

1. 8 o'clock; the hour hand is at 2; 7 o'clock; the minute hand is at 12; 5 o'clock
2. A, B and D should be ticked.
3. Gareth – Clock C; Helen – Clock A; Atifa – Clock B

Expected

4. Five o'clock; the minute hand is at 12; 7 o'clock; the hour hand is at 11; two o'clock
5. B and C should be ticked.
6. Nathan – Clock C; Diana – Clock B; Cerys – Clock A

Greater Depth

7. Five o'clock; the minute hand is at twelve; nine o'clock; the hour hand is at four; six o'clock
8. B and C should be ticked.
9. Alex – Clock B; Grayson – Clock A; Izzy – Clock C